

Simpson's Diversity Index - Practice Questions

The equation for Simpson's Diversity Index is shown below:

$$D = \frac{N(N-1)}{\sum n(n-1)}$$

D = Biodiversity (higher means more diverse)

N = Total number of organisms

n = Number of organisms of each species

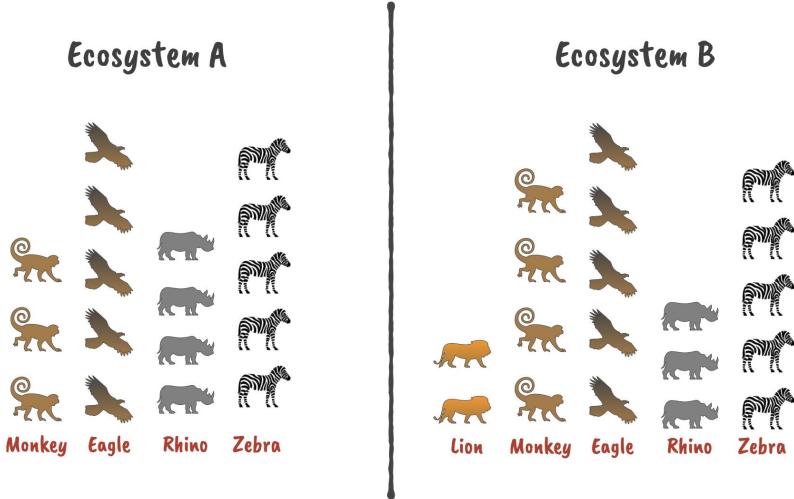
Use Simpson's Diversity Index to answer the questions on the following pages.

Simpson's Diversity Index - Practice Questions

The equation for Simpson's Diversity Index is shown below

Question 1

Calculate "D" for each ecosystem below:

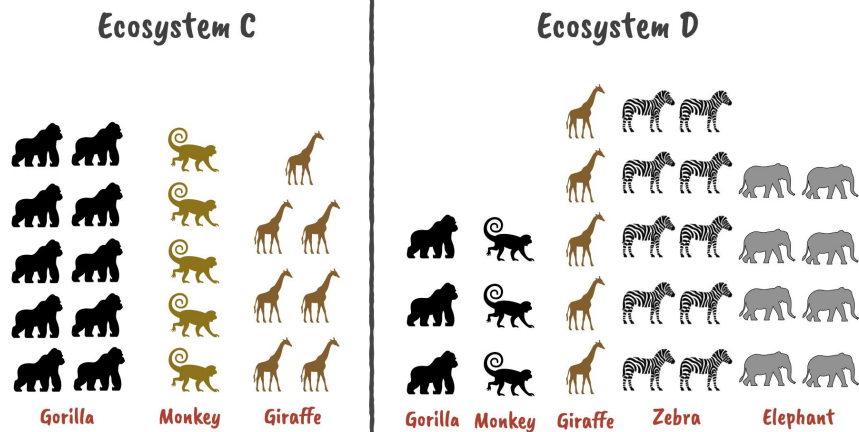


Show your working (you may need an extra page):

Which ecosystem, A or B, has the highest species diversity?

Question 2

Calculate "D" for each ecosystem below:

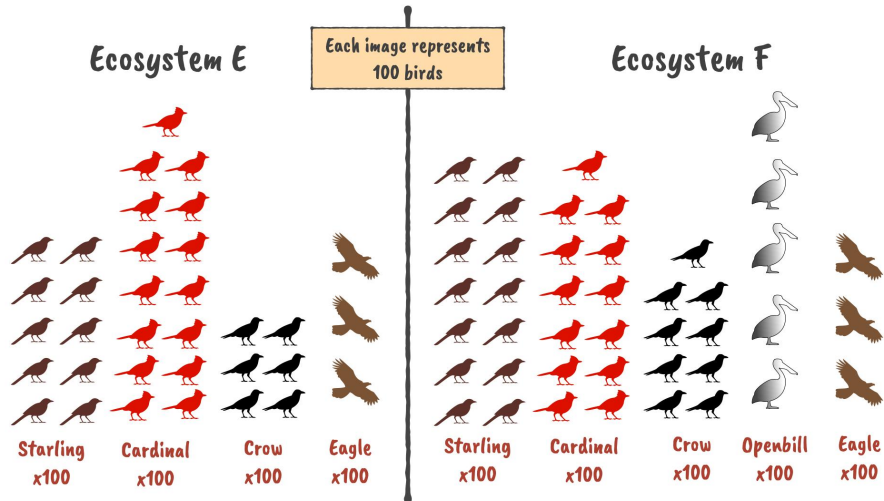


Show your working (you may need an extra page):

Which ecosystem, C or D, has the highest species diversity?

Question 3

Calculate "D" for each ecosystem below:



Show your working (you may need an extra page):

Which ecosystem, E or F, has the highest species diversity?